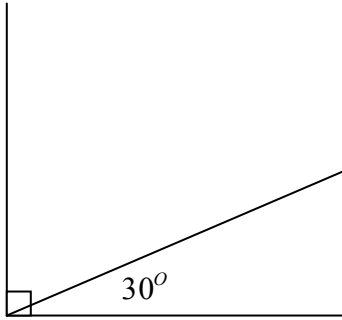


Name \_\_\_\_\_ Period \_\_\_\_\_ Date \_\_\_\_\_

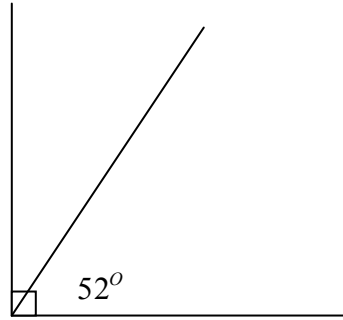
**Missing Measures: Complimentary and Supplementary Angles**

For problems 1 – 4, the angles are complimentary. For problems 5 – 8, the angles are complimentary. Find the missing angle for each problem.

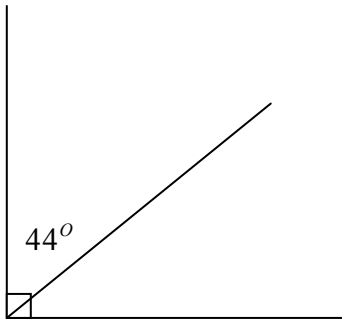
1)



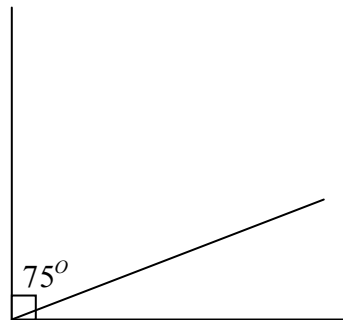
2)



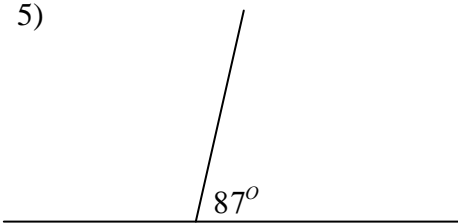
3)



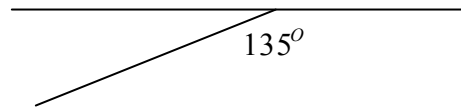
4)




5)



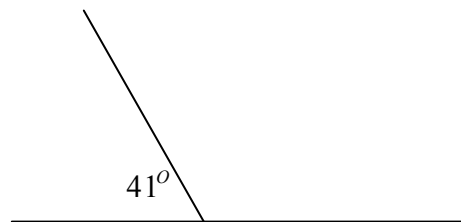
6)



7)



8)

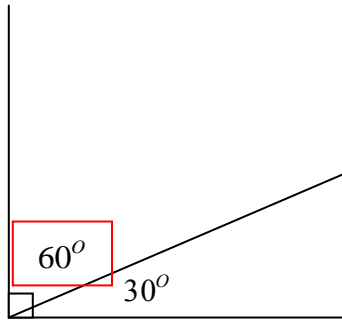


Name ANSWER KEY Period \_\_\_\_\_ Date \_\_\_\_\_

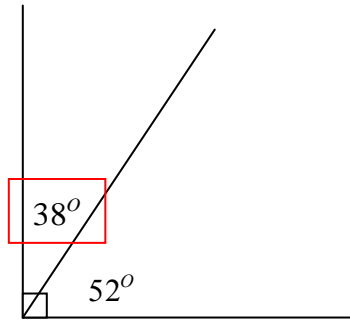
### Missing Measures: Complimentary and Supplementary Angles

For problems 1 – 4, the angles are complimentary. For problems 5 – 8, the angles are complimentary. Find the missing angle for each problem.

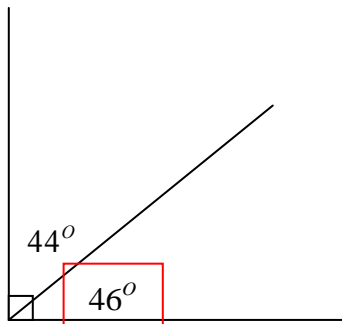
1)



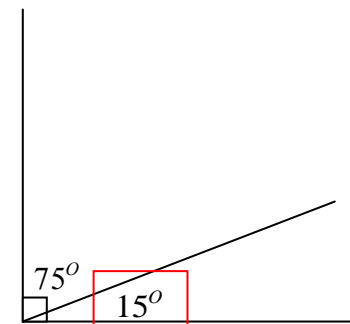
2)



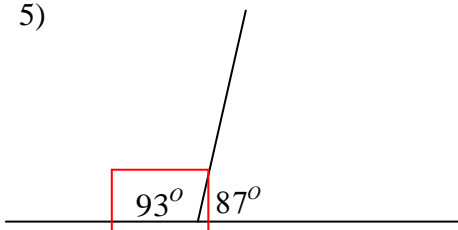
3)



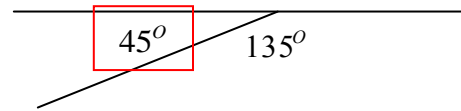
4)



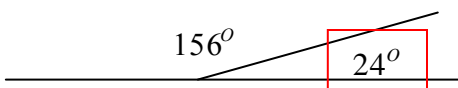
5)



6)



7)



8)

